



BRIGHTLANDS GIRLS SR. SEC. SCHOOL, JAIPUR
ASSIGNMENT - VII
CLASS –II
SUBJECT: ENGLISH

General Instructions:

1. Make a register/notebook for the assignment.

Pronouns

A pronoun is a word used instead of a noun.

Q1. Replace the underlined words with a pronoun from the word box:-

he	she	it	it	we	he	she	it	they	he
----	-----	----	----	----	----	-----	----	------	----






- | | |
|--------------|--|
| a. <u>He</u> | i. <u>My brother</u> is tall. |
| b. _____ | ii. <u>The butterfly</u> was pretty. |
| c. _____ | iii. <u>Jim and Sara</u> are friends. |
| d. _____ | iv. <u>My mom</u> is a nurse. |
| e. _____ | v. <u>The giraffe</u> is tall. |
| f. _____ | vi. <u>My sister</u> is 9 years old. |
| g. _____ | vii. <u>The fireman</u> put out the fire. |
| h. _____ | viii. <u>My sister and I</u> go to the park. |
| i. _____ | ix. <u>That job</u> is really cool. |
| j. _____ | x. <u>The man</u> was nice. |

Q2. One word in each number below is a pronoun. Write it on the line.


- | | | | |
|----------|-------|--------|---------------|
| a. Allen | his | car | i. <u>his</u> |
| b. Door | Marie | her | ii. _____ |
| c. We | happy | people | iii. _____ |

- d. Her hat Jenny iv _____
 e. Roy they garden v. _____
 f. Baseball Bob she vi. _____

Q3. Tick the correct pronoun:

a. He / She is kicking the ball.	
b. This is my / their hat.	
c. It / They are dancing.	
d. You / It is a blue bag.	
e. I / It is eating grass.	

Q4. Do this activity in A4 size sheet. Write your name instead of Peter. Draw your picture and colour it.





BRIGHTLANDS GIRLS SR. SEC. SCHOOL, JAIPUR
ASSIGNMENT - VII
CLASS –II
SUBJECT: MATHS

General Instructions:

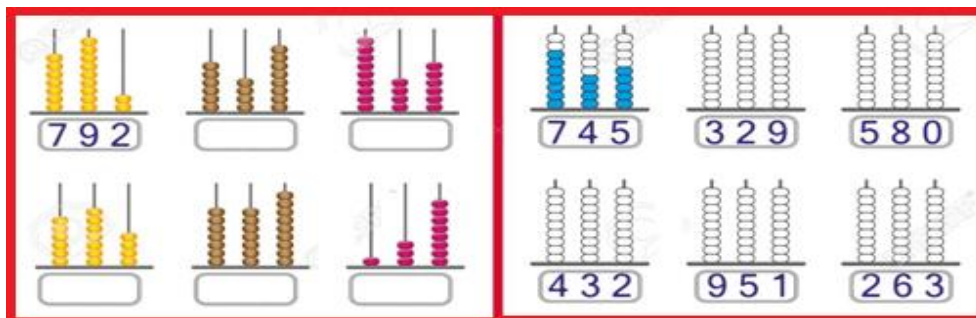
Make a register/notebook for the assignment.

Addition of 2 and 3- digit numbers without carry over :-

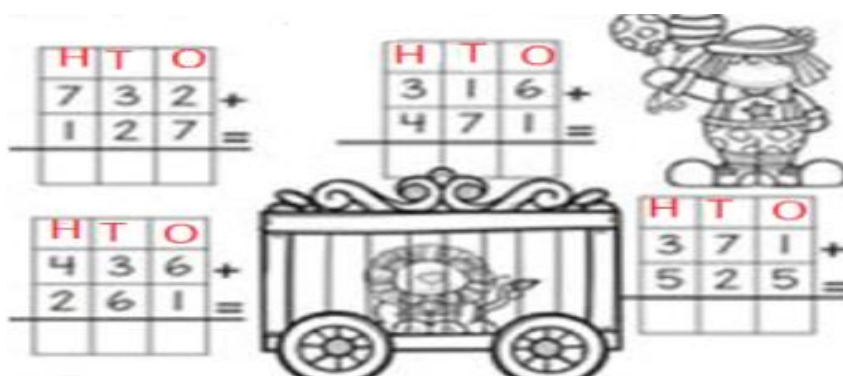
Q.1 Add the following:-

$\begin{array}{r} 3 \\ +5 \\ \hline \end{array}$	$\begin{array}{r} 3 \\ +10 \\ \hline \end{array}$	$\begin{array}{r} 3 \\ +9 \\ \hline \end{array}$	$\begin{array}{r} 3 \\ +7 \\ \hline \end{array}$	$\begin{array}{r} 3 \\ +1 \\ \hline \end{array}$	$\begin{array}{r} 3 \\ +4 \\ \hline \end{array}$
$\begin{array}{r} 3 \\ +3 \\ \hline \end{array}$	$\begin{array}{r} 3 \\ +7 \\ \hline \end{array}$	$\begin{array}{r} 3 \\ +5 \\ \hline \end{array}$	$\begin{array}{r} 3 \\ +9 \\ \hline \end{array}$	$\begin{array}{r} 3 \\ +8 \\ \hline \end{array}$	$\begin{array}{r} 3 \\ +6 \\ \hline \end{array}$

Q2.Count the beads and write the number (First one is done for you).



Q.3 Do solve:-



Q.4 Add 2-digit numbers:-

18	31	10	49	67	28
<u>+21</u>	<u>+16</u>	<u>+38</u>	<u>+30</u>	<u>+32</u>	<u>+50</u>
_____	_____	_____	_____	_____	_____

Q.5 Word Problems:-

a.) Mary has 3 bananas and 4 cherries. How many fruits does she have in all?



$$\boxed{} + \boxed{} = \boxed{}$$

b.) There are 4 orange slices in a plate. Pam adds 4 more. How many orange slices are there in the plate now?

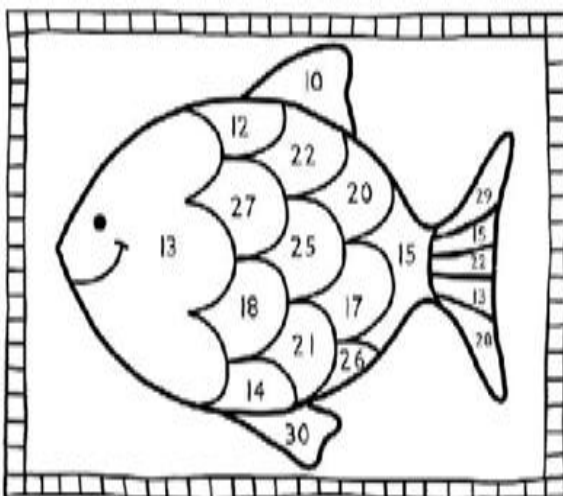


$$\boxed{} + \boxed{} = \boxed{}$$

Q.6 Practice 3-digit addition:-

$\begin{array}{r} 636 \\ + 301 \\ \hline \end{array}$	$\begin{array}{r} 238 \\ + 341 \\ \hline \end{array}$	$\begin{array}{r} 142 \\ + 231 \\ \hline \end{array}$	$\begin{array}{r} 425 \\ + 504 \\ \hline \end{array}$
---	---	---	---

Q.7 Activity will be done on a A4 - size sheet. Mark it as an Activity -1 by using color pencil.



red	yellow	green	purple
6+6= <input type="text"/>	10+3= <input type="text"/>	17+4= <input type="text"/>	6+4= <input type="text"/>
10+5= <input type="text"/>	11+6= <input type="text"/>	12+10= <input type="text"/>	15+15= <input type="text"/>
7+7= <input type="text"/>	13+7= <input type="text"/>	9+9= <input type="text"/>	25+4= <input type="text"/>
15+10= <input type="text"/>	18+9= <input type="text"/>	22+4= <input type="text"/>	15+13= <input type="text"/>



BRIGHTLANDS GIRLS SR. SEC. SCHOOL, JAIPUR
ASSIGNMENT - VII
CLASS –II
SUBJECT: EVS

General Instructions:

Make a register/notebook for the assignment.

Our house protects us from heat, cold, rain, thieves, wild animals, dirt and dust.

Q.1 Fill in the blanks with help of given words:

tents, igloos, house, strong

- a) We all need a _____ to live in.
- b) Mountain climbers often carry _____ with them.
- c) A house built of cement and bricks are very _____.
- d) Eskimos live in _____.

Q.2 Unscramble the letters to make complete words.

- a) RSTLHEE (it gives us protection) - _____
- b) SEVCA (Shelter of early man) - _____
- c) OOILG (House of Eskimos) - _____
- d) RUBORW (Rabbit's house) - _____

Q.3 Tick (✓) the right answer:-

- a) An Eskimos lives in a / an _____.
(i) tent (ii) igloo
- b) Stilt houses are found in _____.
(i) Delhi (ii) Assam

c) Houseboats are found in _____.

(i) Kashmir







(ii) Delhi

d) A tent is made of _____.

(i) Canvas

(ii) Wheels

Q.4 Match the following:-

S.N.	Column A		Column B
1.		a.	Houseboat
2.		b.	Tent
3.		c.	Pucca house
4.		d.	Kutcha house
5.		e.	Igloo
6.		f.	Caravan

Q.5 Answer the following:-

a.) Why do we need a house?

Ans _____.

b.) Write name of any five types of houses.

Ans _____.



BRIGHTLANDS GIRLS SR. SEC. SCHOOL, JAIPUR
ASSIGNMENT - VII
CLASS –II
SUBJECT: HINDI

सामान्य निर्देश :-

- सभी प्रश्न अपनी उत्तर पुस्तिका में करें।
- नीचे लिखी परिभाषा को ध्यानपूर्वक पढ़ें।


वचन :- शब्द के जिस रूप से उसके एक या अनेक होने का पता चले, उसे वचन कहते हैं अर्थात् वचन से हमें किसी प्राणी या वस्तु की संख्या का पता चलता है।

वचन दो प्रकार के होते हैं:-

1. एकवचन:- शब्द के जिस रूप से उसके एक होने का पता चले।
2. बहुवचन:- शब्द के जिस रूप से उसके एक से अधिक होने का पता चले।

प्र.1.

चित्र देखकर बताइए कौन सी चीज एक है और कौन सी अनेक -



एक

अनेक

प्र.2. सही शब्द लिखकर अनुच्छेद पूरा करें-




पत्ते, गर्मियों, आंधी, पेड़, पंखा, बूंदें, चिड़ियां, घोंसलों

_____ के दिन थे । _____ अपनी पूरी गति से चल रहा था ।

लेकिन कोई लाभ नहीं । अचानक तेज _____ आ गई । _____ जोर-जोर से हिलने लगे । _____ खड़खड़ा रहे थे । _____ पडने लगी । _____ _____ में छुप गई ।

प्र.3. दिए गए चित्रों को देखकर उनके एक और अनेक रूप लिखे:-

एक	
	मछली
	_____
	_____
	_____
	_____

अनेक	
	मछलियाँ
	_____
	_____
	_____
	_____

प्र.4. एक को अनेक से मिलाओ :-

गाड़ी	बहने
बाजा	केले
बहन	बाजे
केला	गाड़ियां

प्र.5.

नीचे लिखे वाक्यों को एकवचन में लिखो -

1) बच्चे आईसक्रीम खा रहे हैं।

2) तितलियाँ फूलों पर बैठी हैं।

3) लड़कियाँ चूड़ियाँ पहन रही हैं।

4) लड़के टोपियाँ लाए।

5) आसमान में तारे चमके।

प्र.6. चित्र को देखकर घर में उपलब्ध कागजों से एक संज्ञा की गुड़िया बनाओ जिसमें व्यक्ति एवं वस्तुओं के नाम उसकी पहनी हुई पोक्षाक पर लिखे।

